









# International Space Station Anniversary: Emoji Math









On Nov. 2, NASA celebrates the anniversary of the International Space Station. Solve the puzzles below to learn facts about the orbiting outpost!











The International Space Station orbits Earth every \_\_\_\_\_ minutes.

 +  = 40  
 +  = 30  
 +  = 80  
 +  = ?









How many people have visited the International Space Station?

 +  = 264  
 -  = 68  
 +  = 300  
 +  = ?

People from \_\_\_\_\_ countries have visited the space station.

 +  = 6  
 x  = 12  
 x  = 24  
 +  = ?

The first pieces of the space station launched in 19\_\_\_\_\_.

 x  = 81  
 +  = 59  
 -  = 20  
 +  = ?

Want to learn more about the space station?

Check out the facts and figures at [https://www.nasa.gov/mission\\_pages/station/overview/index.html](https://www.nasa.gov/mission_pages/station/overview/index.html).